






Name: \_\_\_\_\_



# JUNE












Sunday	Monday	Tuesday	Wednesday	Thursday	Friday	Saturday
				1	2	3
4	5	6	7	8	9	10
11	12	13	14	15	16 Last Day of School! 😊	17 Find the unknown. $? + 8 = 16$
18 	19 This rectangle has ___ rows and ___ columns of square tiles. 	20 What number is 10 more than 563?	21 The sum of 10 + 5 is equal to the sum of 6 + ____.	22 What is the value of the underlined digit? 6 <u>3</u> 5	23 Solve. $\begin{array}{r} 84 \\ -17 \\ \hline \end{array}$	24 Count forward by tens: 146, ____, ____, ____
25 	26 How many angles does this shape have? 	27 Which number is greater? 876 or 786	28 How many ones, tens, and hundreds does this number have? 459	29 Solve. $92 - 28$	30 Solve. $\begin{array}{r} 36 \\ +25 \\ \hline \end{array}$	



# JULY












Sunday	Monday	Tuesday	Wednesday	Thursday	Friday	Saturday
						1 Which of these numbers are odd?  2, 3, 9, 15, 20
2 	3 What is the name for the equal parts of this circle? 	4 Happy 4 <sup>th</sup> of July! 	5 Count forward by fives: 595, ____, ____, ____	6 Is the sum of 6+6 an even number or an odd number?	7 What is the missing number? 160, ____, 360, 460	8 What number is 10 less than 107?
9 	10 What number is 100 more than 379?	11 Write this number in word form.  246	12 What time is it? 	13 Write this number in standard form.  5 ones 7 hundreds	14 Find the unknown.  $4 + ? = 11$	15 What is seven hundred fifty-four minus two hundred eighty-two?
16 	17 You have 1 quarter, 2 dimes, 1 nickel, and 8 pennies. How many more cents do you need to make one dollar?	18 Which of these numbers are even?  1, 4, 7, 13, 16	19 What is the name for the equal parts of this triangle? 	20 Solve. $43 + 18 + 31 + 65$	21 Which number is less?  564 or 562	21 Write this number in standard form.  13 tens
23/30 	24/31 Find the unknown. $? + 8 = 17$	25 What is the missing number?  885, 895, ____, 915	26 Measure the line to the nearest inch. 	27 What is the value of the underlined digit?  <u>4</u> 97	28 Drew is 46 inches tall. Mark is 14 inches taller than Drew. How tall is Mark?	29 Which of these numbers are even?  6, 12, 14, 17, 19



# AUGUST



Sunday	Monday	Tuesday	Wednesday	Thursday	Friday	Saturday
	July 31 Measure the line to the nearest centimeter. 	1 Which of these numbers are odd? 5, 8, 10, 11, 18	2 How many faces does a cube have? 	3 The sum of 6 + 7 is equal to the sum of 8 + ____	4 Make the greatest 3-digit number using these digits: 7, 4, and 8	5 This whole is made up of 2 ____ 
6 	7 Count forward by fives: 38, ____, ____, ____	8 What is the missing number? ____, 620, 625, 630	9 Complete the addition sentence. __ + __ + __ = ____ 	10 Use the fewest number of coins to make 89¢.	11 Sue has a 52 cm of ribbon. She cuts off 23 cm. How many centimeters of ribbon remain?	12 Count backward by hundreds: 519, ____, ____, ____
13 	14 True or false? This shape is divided into thirds. 	15 Make the smallest 3-digit number using these digits: 6, 2, and 3	16 Amy has 159 red beads and 108 blue beads. How many beads does she have in all?	17 Count backward by tens: 241, ____, ____, ____	18 Complete the addition sentence.  __ + __ + __ + __ = __	19 Solve. $\begin{array}{r} 341 \\ + 156 \\ \hline \end{array}$
20 Go to bed early! 	21 First day of school ☺	22	23	24 Math calendars are due to Ms. Schroeder! ☺	25	26
27	28	29	30	31		