


Name: _____



JUNE








Sunday	Monday	Tuesday	Wednesday	Thursday	Friday	Saturday
				1	2	3
4	5	6	7	8	9	10
11	12	13	14	15	16 Last Day of School! 😊	17 Count how many shoes are in your closet. How many are there?
18 	19 Start counting at 35. Count until you get to 45.	20 Sing the numbers to 80.	21 Find something that is a square! Trace it and write a nice note to someone inside it!	22 Count the number of windows in your home. How many did you count?	23 Grab a shoe from each member of your family. Put them in order shortest to longest.	24 Count the chairs in your home. How many are there?
25 	26 Count to 95 in a baby bear voice.	27 Start counting at 61. Count until you get to 83.	28 Find 8 things in your home that are circles.	29 Count to 70 while marching!	30 Count all of the forks in your kitchen drawer. How many are there?	



JULY






Sunday	Monday	Tuesday	Wednesday	Thursday	Friday	Saturday
						1 Which number is greater 28 or 26?
2 	3 Happy 4 th of July! 	4 COUNT TO 100 while jumping up and down!	5 There were 10 swimmers in the pool. 4 got out. How many were left in the pool?	6 Count from 42 to 57.	7 Count the spoons in your kitchen. Count the forks. Which has more?	8 What do I add to 4 to make 10?
9 	10 Grab six things out of your closet. Put them in order from longest to shortest.	11 Count to 100 by tens as fast as you can. Do it again. Did you do it faster?	12 There were 8 balloons. 4 popped. How many were left?	13 Count the socks in your drawer. How many are there?	14 Write your numbers as high as you can using crayons.	15 What is your favorite shape? Why? Draw it.
16 	17 There were 5 ducks in the stream. 3 more joined them. How many ducks are there now?	18 Pick a number less than 20. Show it in three ways.	19 Which number is greater 34 or 37?	20 There were 9 cupcakes. I ate 6. How many were left?	21 What is your favorite activity in math? Why is it your favorite? Write about it.	22 Find a partner! Count to 90 together!
23/30 	24/31 What do I add to 3 to make 10?	25 Write your numbers 1-50. Use crazy writing!	26 Find 24 of something. Put them in ten groups and extra ones.	27 Pick a number between 20 and 40. Show it in three ways.	28 Count the chairs in your home. How many are there?	29 Pick two books. Read them both. Which one weighs more?



AUGUST



Sunday	Monday	Tuesday	Wednesday	Thursday	Friday	Saturday
	July 31 I had 8 shoes. The dog ate 6. How many were left?	1 How many feet do your family members have altogether?	2 Pick two toys. Which weighs more?	3 How many doorknobs are in your house?	4 Start counting at 73. Count to 95.	5 How are a triangle and a square alike? How are they different?
6 	7 If I have 6 cookies, how many more do I need to make 10?	8 I found 8 seashells. I lost 5. How many did I have left?	9 Pick a friend. Who is taller? You or your friend?	10 There were 5 kids at the park. 3 more came. How many kids were there altogether?	11 Pick a friend. Who has a longer name? (first and last) You or your friend?	12 Start counting at 29. Count until you get to 51.
13 	14 I ate 7 pieces of pizza. My mom ate 3. How many did we eat altogether?	15 I jumped in the pool 9 times. My friend jumped in 8. Who jumped in more times?	16 I had 3 dolls. My grandma bought me 5 more. How many do I have now?	17 There were 6 horses. 3 fell asleep. How many horses were still awake?	18 Count as high as you can. Can you count to 120?	19 How many steps does it take you to walk from your bedroom to your kitchen?
20 Go to bed early! 	21 First day of school 😊	22	23	24 Math calendars are due to Ms. Schroeder! 😊	25	26
27	28	29	30	31		